

National Assessments
5 -14

Mathematics

Level B

Name

Date.....

Assessment 000 - A



Assessment is for Learning

Questions 1 - 5 will be read to you.

Write down your answer to these questions without doing any working

1

2

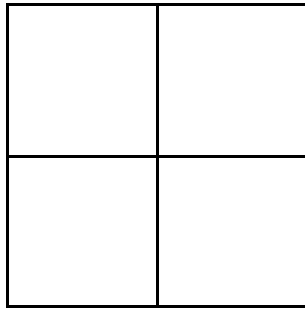
3

4

5

6

Shade three quarters of the shape.



7

Put these numbers in order from the smallest to the largest.

325 532 235 523

Answer: _____

8

Add

$$94 + 34$$

Answer: _____

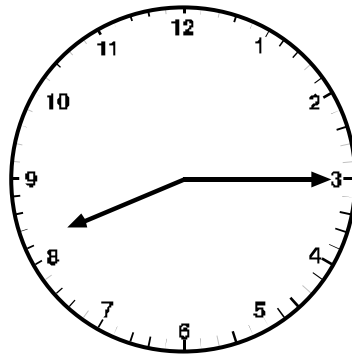
9

Complete the pattern by writing numbers in the spaces.

4, 8, 12, 16, _____, _____, _____

10

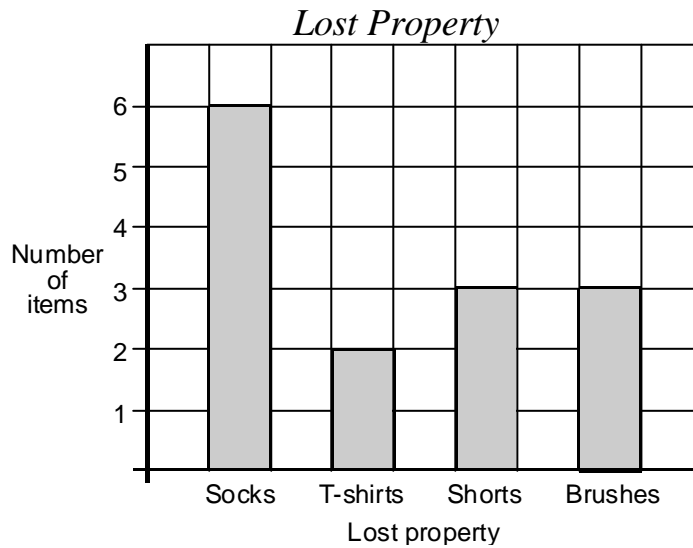
What time is it on the clock?



Answer: _____

11

The graph shows items left behind at a Sports Centre one week.



How many T-shirts were left behind?

Answer: _____ T-shirts

12

Mrs Jones has a coffee shop.
In the morning she bakes 25 cakes.
At lunchtime she has only 6 cakes left.

How many cakes has she sold?

Answer: _____ cakes

13

This grid shows a plan of Mr Green's flower garden.

4				
3				
2				
1	daisies			violets
	A	B	C	D

Roses are being planted in C2.

Write the word 'roses' in the C2 box

14

The person with the most stars wins a prize.

Ken	☆				☆		
Mary		☆		☆			☆
Jay		☆					
Lee			☆	☆		☆	☆
Viv	☆					☆	
Pam			☆		☆		

Who has the most stars?

Answer: _____

15

How many 5p coins make 40p?

Answer: _____ 5p coins

16

Subtract

$$52 - 15$$

Answer: _____

17

Three friends count their money.

Clara has 17p, Dora has 36p and Vera has 28p.

How much do they have altogether?

Answer: _____ p

18

60 children go on a school trip. They are put in groups of 10.

How many groups will there be?

Answer: _____ groups

19

Circle the month which comes before July.

August

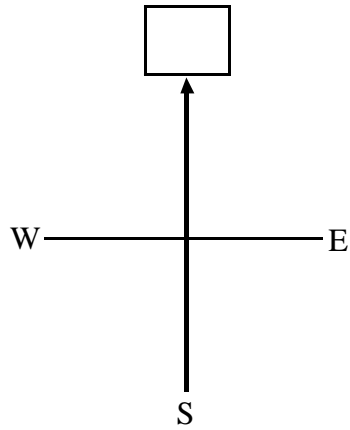
February

April

June

20

A compass point is missing from the drawing.



Write the correct compass point inside the box.

21

Put a number in the box to make the sum correct.

$$\boxed{} - 3 = 26$$

22

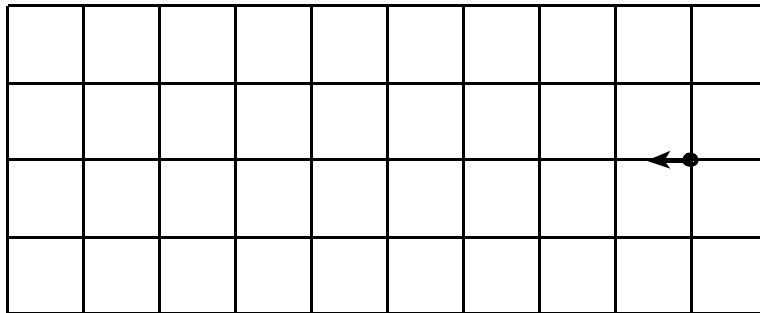
It takes 24 cm of ribbon to make one bow.

How much ribbon is needed to make 5 bows?

Answer: _____ cm

23

Follow these directions and draw the shape.



Start at the dot.

go forward 4 squares, turn right,

go forward 1 square, turn right,

go forward 4 squares, turn right,

go forward 1 square.

24

Write the missing numbers in place of the dots.

$$\begin{array}{r} 6 \bullet \\ + \bullet 3 \\ \hline 9 2 \\ \hline \end{array}$$

25

There are 32 people in a cinema queue.

4 people leave and 9 more people join the queue.

How many people are now in the queue?

Answer: _____ people

Mental Questions - for teacher use only

Questions 1 - 5 should be read to the pupils.

Read each question twice. Pause for 10 seconds between each question.

Remind pupils that they must write their answer to each question without doing any working.

(After completing the oral mental questions, instruct pupils to continue with the questions written in their assessment booklet.)

1

Write down the number four hundred and fourteen.

2

Divide 21 by 3.

3

Round the number 17 to the nearest ten.

4

What is 4 times 8?

5

What is 12 add 7?

Last Page

This is the last page of the Assessment.

It can be discarded.