

National Assessments
5 -14

Mathematics

Level A

Name

Date.....

Assessment 00A



Assessment is for Learning

Questions 1 - 4 will be read to you.

Write down your answer to these questions without doing any working.

1

2

3

4

5

Karen is 9 years old. Bobby is 5 years old.

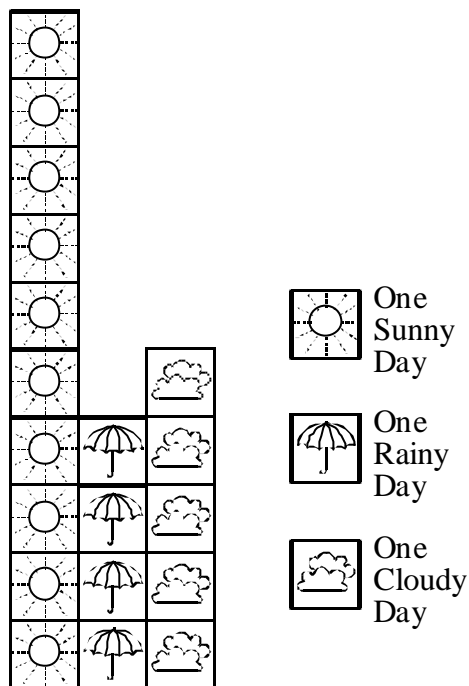
How much older is Karen than Bobby?

Answer: _____ years

2999

6

The weather chart was made by pupils in a school.




How many days were cloudy?

Answer: _____ days

2992

7

Angela has the number ten on her T-shirt.




Write the number ten on the T-shirt.

3020

8

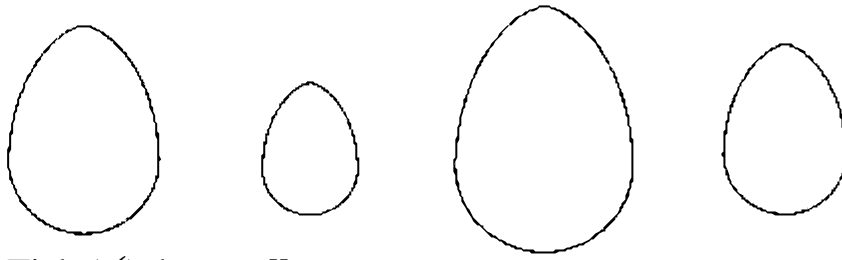
Draw the missing hand on this clock to show 8 o'clock.



3057

9

All these eggs are different sizes.



Tick (✓) the **smallest** egg.

3048

10

4 apples are taken from a bag of 8 apples.

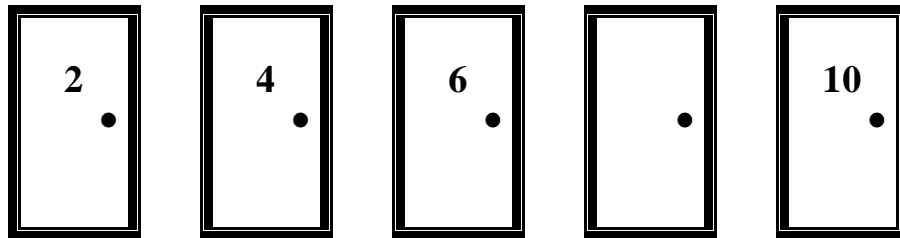
How many are left?

Answer: _____ apples

3051

11

The number on one of the doors is missing.




Fill in the missing number.

3078

12

Put a tick inside any shapes with curved edges.



4571

13

Ben has some money in his pocket.



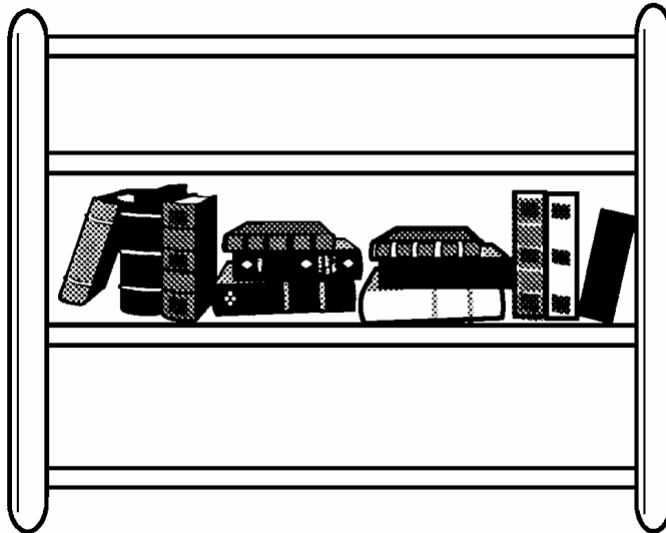
How much money is this?

Answer: _____ p

3130

14


Draw a ball on the shelf **below** the books.



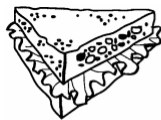
3082

15

The picture shows some snacks.



Tick (✓) the snack there is most of.



Sandwich



Roll

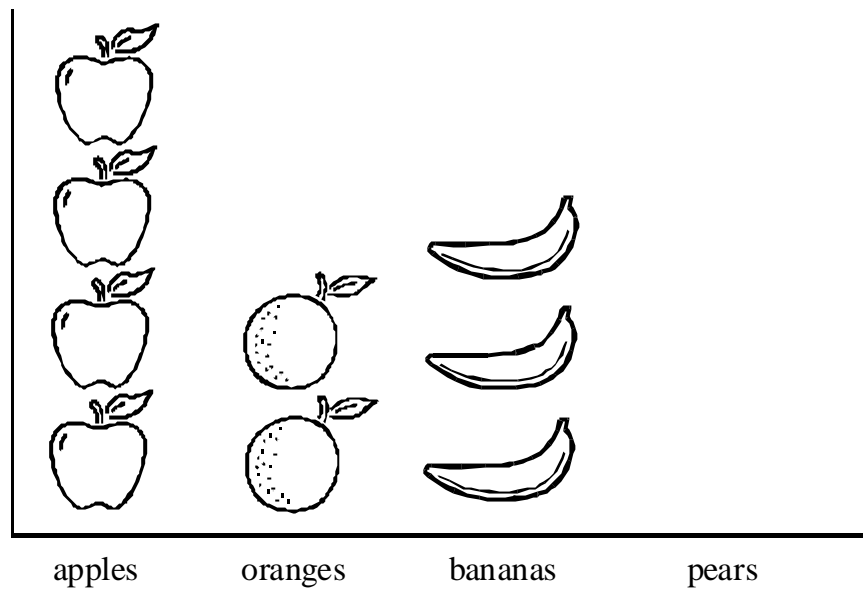


Hot Dog

16

The chart shows fruit sold in the school shop.

Fruit sold



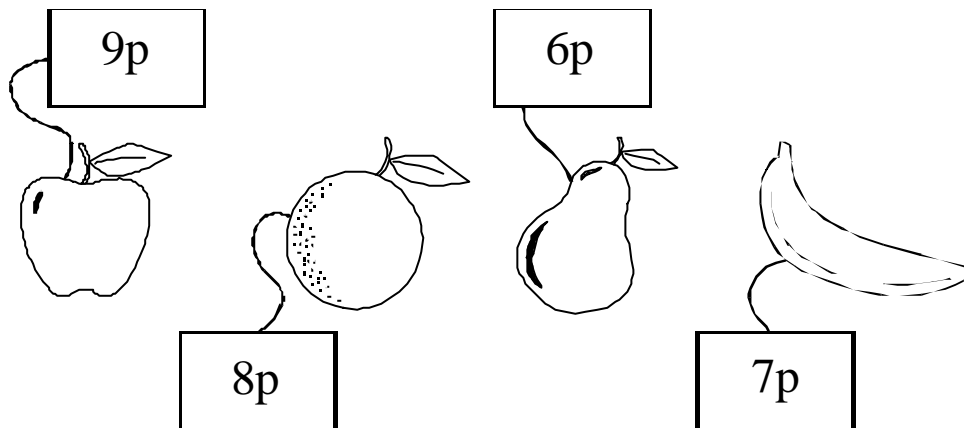
The shop sells 4 pears

Add 4 pears to the chart.

3276

17

Here are the prices of some fruits.



Write the prices in order starting with the lowest.


Answer: _____ p _____ p _____ p _____ p

3278

18

Find a rectangle shape in the picture.

Colour it with your pencil.



3302

19

5 people are in a queue.



4 people join the queue and 1 person is served and leaves the queue.

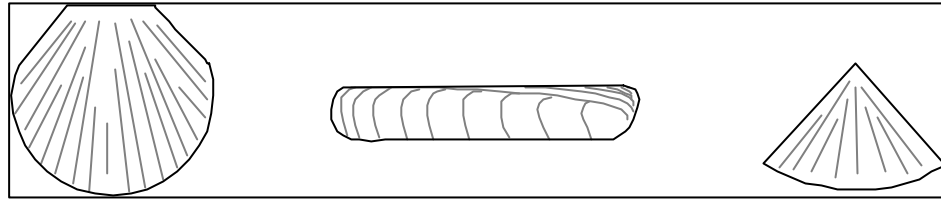
How many people are now in the queue?

Answer: _____ people

3256

20

Here are drawings of some shells.



scallop

razor shell

limpet

Tick (✓) the shape which has only 2 straight edges and 1 curved edge.

Mental Questions - for teacher use only

Questions 1 - 4 should be read to the pupils.

Read each question twice. Pause for 10 seconds between each question.

Remind pupils that they must write their answer to each question without doing any working.

(After completing the oral mental questions, instruct pupils to continue with the questions written in their assessment booklet.)

1

 Fiona has a 5p coin, a 1p coin and a 2p coin. How much money has she altogether?

4904

2

 Subtract 3 from 9.

5061

3

 I am going to read out three numbers. 16, 12 and 14. Write down the smallest.

3181

4

 Write the number which comes before 19..

3174
